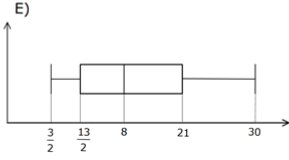
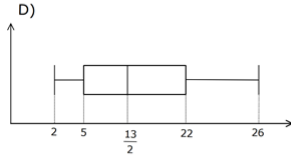
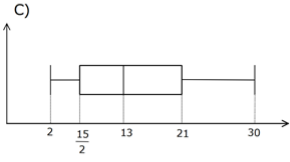
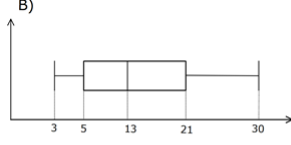
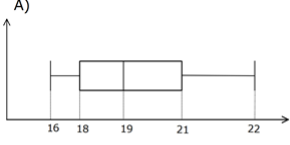


## KUTU GRAFİĞİ

1)

16, 23, 10, 8, 20, 14, 3, 2, 12, 7, 30, 22

veri grubunun kutu grafiđi hangi řıkta dođru gste-  
rilmiřtir?



CEVAP: C